



naam: _____ klas: _____

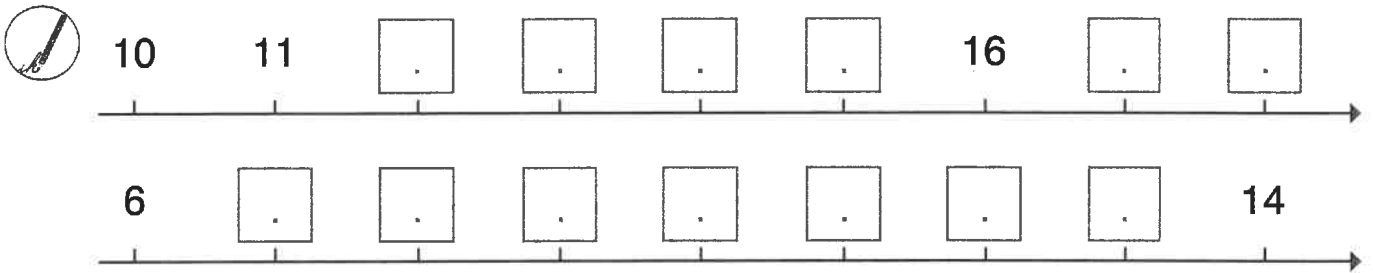
getallenkennis

1 luister goed en schrijf de getallen.

2 hoeveel zwanen zwemmen op de vijver? schrijf het getal.

|

3 vul de getallenas aan.



4 kijk naar de getalbeelden. vul de getallen in en vergelijk met >, < of =.

5 vergelijk: <, > of =.


12 14 16 6 20 15

20 12 19 11 15 15




naam: _____ klas: _____

6 orden de getallen.


 18 13 7 20 \longrightarrow < < <
 19 6 12 14 \longrightarrow > > >

7 verbind met ... sprongen van 1



2	3	4	5	6
1	16	17		7
12	13	14	18	19
0	11	10	9	20

sprongen van 2


0	2	4	6	8	10
20	18	16	14	12	


8 vul het 20-veld aan.



									0
1	2	3	4	5					10
11	12	13	14					19	20


9 kijk naar de splitsingen en vul in.






17

10	<input type="text"/>
----	----------------------




20

<input type="text"/>	10
----------------------	----



18 is 10 en ...


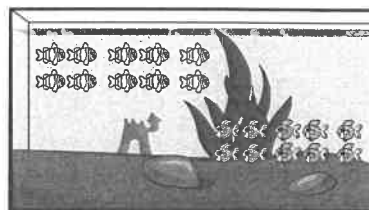

10	<input type="text"/>
----	----------------------



14 is 2 en ...

2	<input type="text"/>
---	----------------------

10 verdeel de vissen onder de 2 beren.






naam: _____ klas: _____

bewerkingen

11 vul in. kijk naar de getalbeelden.




$10 + 10 = \square$




$14 - 3 = \square$



$15 - 5 = \square$




$10 + 7 = \square$




$13 - 10 = \square$



$15 - 10 = \square$



$11 + 8 = \square$



$17 - 2 = \square$

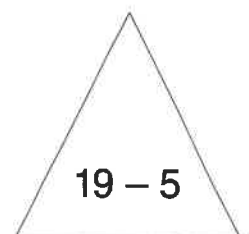

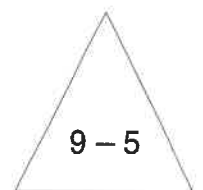



$13 + 5 = \square$

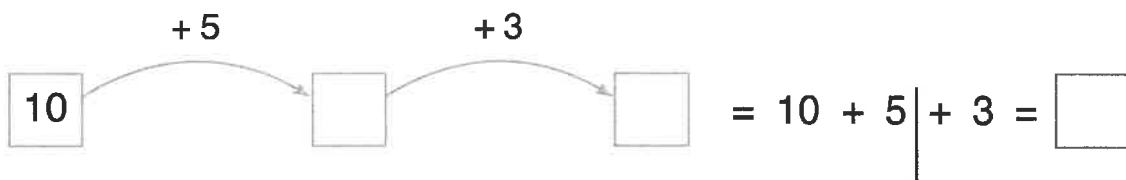
12 los op. kleur de bewerking en de uitkomst die erbij hoort in dezelfde kleur.



- 18 15 4 10 5 20 8 14



13 los de pijlen op.






naam: _____ klas: _____

meten en metend rekenen

14 kleur de kleine wijzer. vul in hoe laat het is.

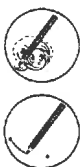


het is . uur.





het is . uur.


15 teken de kleine wijzer en verbind met de activiteit.



het is 12 uur.



het is 8 uur.



16 kruis aan wat past!



	<input type="radio"/> m
	<input type="radio"/> kg
	<input type="radio"/> l
	<input type="radio"/> uur

	<input type="radio"/> m
	<input type="radio"/> kg
	<input type="radio"/> l
	<input type="radio"/> uur

	<input type="radio"/> m
	<input type="radio"/> kg
	<input type="radio"/> l
	<input type="radio"/> uur

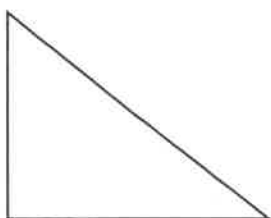
	<input type="radio"/> m
	<input type="radio"/> kg
	<input type="radio"/> l
	<input type="radio"/> uur

meetkunde


17 kleur ...



kleur de drie hoeken groen.



overtrek de gebogen lijnen met geel.



Naam:

Nr.

denk en vul in.

$10 - 8 = \dots$

$3 + 6 = \dots$

$9 - 4 = \dots$

$7 - 6 = \dots$

$4 + 5 = \dots$

$9 - 6 = \dots$

$3 + 4 = \dots$

$10 - 6 = \dots$

$9 - 7 = \dots$

$8 - 3 = \dots$

$5 + 3 = \dots$

$0 + 9 = \dots$

$8 - 5 = \dots$

$2 + 6 = \dots$

$8 - 7 = \dots$

$4 + 4 = \dots$

$4 + 3 = \dots$

$7 - 3 = \dots$

$6 + 4 = \dots$

$8 - 2 = \dots$

$2 + 7 = \dots$

$5 + 4 = \dots$

$7 - 5 = \dots$

$8 - 4 = \dots$

$7 + 3 = \dots$

$1 + 9 = \dots$

$10 - 5 = \dots$

$2 + 8 = \dots$

$10 - 10 = \dots$

$1 + 7 = \dots$

$9 - 2 = \dots$

$2 + 5 = \dots$

$7 + 2 = \dots$

$1 + 8 = \dots$

$10 - 4 = \dots$

$8 + 2 = \dots$

$9 - 8 = \dots$

$10 - 1 = \dots$

$4 + 6 = \dots$

$5 + 2 = \dots$

$10 - 7 = \dots$

$7 - 4 = \dots$

$9 - 3 = \dots$

$8 - 6 = \dots$

$5 + 5 = \dots$

$6 + 3 = \dots$

$7 - 2 = \dots$

$6 + 2 = \dots$



Naam:

Nr.

vul snel in.

$3 + 7 = \dots$

$10 - 8 = \dots$

$8 - 5 = \dots$

$2 + 7 = \dots$

$5 + 4 = \dots$

$8 - 4 = \dots$

$8 + 2 = \dots$

$10 - 5 = \dots$

$6 + 3 = \dots$

$4 + 2 = \dots$

$2 + 8 = \dots$

$8 - 7 = \dots$

$6 + 2 = \dots$

$5 + 5 = \dots$

$9 - 5 = \dots$

$9 - 6 = \dots$

$8 + 1 = \dots$

$10 - 4 = \dots$

$6 + 3 = \dots$

$0 + 7 = \dots$

$8 - 2 = \dots$

$1 + 7 = \dots$

$7 + 3 = \dots$

$9 - 9 = \dots$

$7 - 5 = \dots$

$5 + 2 = \dots$

$4 + 6 = \dots$

$9 - 4 = \dots$

$3 + 6 = \dots$

$10 - 6 = \dots$

$2 + 2 = \dots$

$4 + 6 = \dots$

$8 - 8 = \dots$

$9 - 7 = \dots$

$3 + 5 = \dots$

$5 - 3 = \dots$

$6 + 4 = \dots$

$0 + 9 = \dots$

$10 - 3 = \dots$

$8 - 6 = \dots$

$4 + 5 = \dots$

$10 - 7 = \dots$

$6 - 4 = \dots$

$2 + 5 = \dots$

$9 - 3 = \dots$



Naam:

Nr.

vul snel in.

$9 - 3 = \dots$

$10 - 7 = \dots$

$0 + 9 = \dots$

$5 - 3 = \dots$

$4 + 6 = \dots$

$9 - 6 = \dots$

$6 + 3 = \dots$

$1 + 7 = \dots$

$7 - 5 = \dots$

$9 - 4 = \dots$

$3 + 7 = \dots$

$2 + 7 = \dots$

$8 + 2 = \dots$

$2 + 8 = \dots$

$6 + 2 = \dots$

$2 + 5 = \dots$

$4 + 5 = \dots$

$10 - 3 = \dots$

$3 + 5 = \dots$

$8 - 8 = \dots$

$8 + 1 = \dots$

$0 + 7 = \dots$

$7 + 3 = \dots$

$5 + 2 = \dots$

$3 + 6 = \dots$

$10 - 8 = \dots$

$5 + 4 = \dots$

$10 - 5 = \dots$

$4 + 2 = \dots$

$5 + 5 = \dots$

$6 - 4 = \dots$

$8 - 6 = \dots$

$6 + 4 = \dots$

$9 - 7 = \dots$

$2 + 2 = \dots$

$10 - 4 = \dots$

$8 - 2 = \dots$

$9 - 9 = \dots$

$4 + 6 = \dots$

$10 - 6 = \dots$

$8 - 5 = \dots$

$9 - 5 = \dots$

$6 + 3 = \dots$

$8 - 7 = \dots$

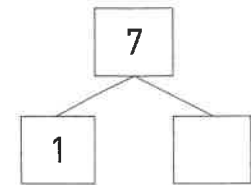
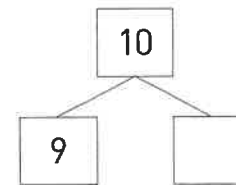
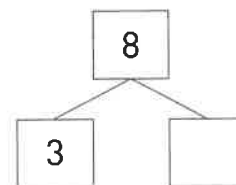
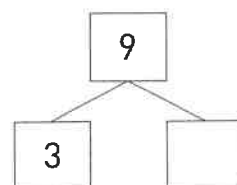
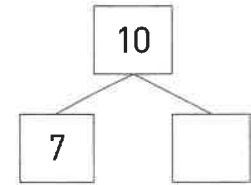
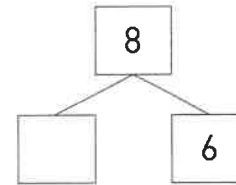
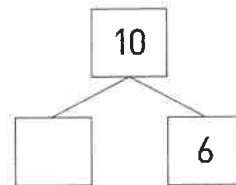
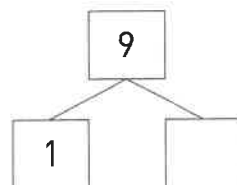
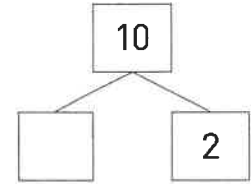
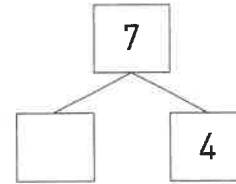
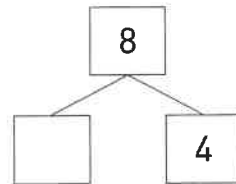
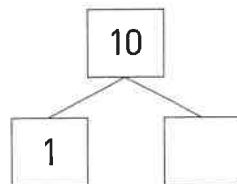
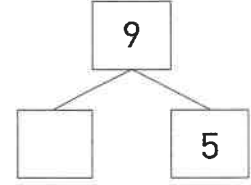
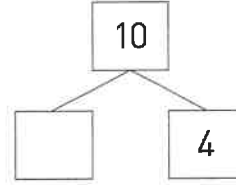
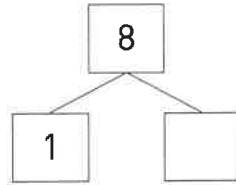
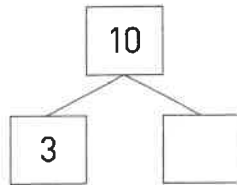
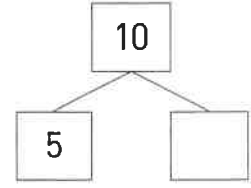
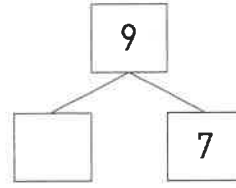
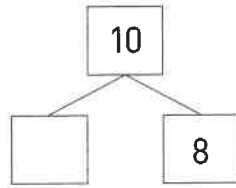
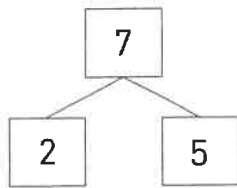
$8 - 4 = \dots$



Naam:

Nr.






vul in.



Naam:

Nr.






vul in.

 $\begin{array}{c} 8 \\ / \quad \backslash \\ 3 \quad \square \end{array}$	$\begin{array}{c} 7 \\ / \quad \backslash \\ 2 \quad \square \end{array}$	$\begin{array}{c} 6 \\ / \quad \backslash \\ 1 \quad \square \end{array}$	$\begin{array}{c} 8 \\ / \quad \backslash \\ 1 \quad \square \end{array}$
 $\begin{array}{c} 8 \\ / \quad \backslash \\ 4 \quad \square \end{array}$	$\begin{array}{c} 8 \\ / \quad \backslash \\ \square \quad 6 \end{array}$	$\begin{array}{c} 6 \\ / \quad \backslash \\ \square \quad 4 \end{array}$	$\begin{array}{c} 5 \\ / \quad \backslash \\ \square \quad 3 \end{array}$
 $\begin{array}{c} 8 \\ / \quad \backslash \\ 1 \quad \square \end{array}$	$\begin{array}{c} 8 \\ / \quad \backslash \\ \square \quad 3 \end{array}$	$\begin{array}{c} 8 \\ / \quad \backslash \\ \square \quad 2 \end{array}$	$\begin{array}{c} 7 \\ / \quad \backslash \\ \square \quad 4 \end{array}$
 $\begin{array}{c} 8 \\ / \quad \backslash \\ 2 \quad \square \end{array}$	$\begin{array}{c} 8 \\ / \quad \backslash \\ \square \quad 5 \end{array}$	$\begin{array}{c} 6 \\ / \quad \backslash \\ 3 \quad \square \end{array}$	$\begin{array}{c} 5 \\ / \quad \backslash \\ 4 \quad \square \end{array}$
 $\begin{array}{c} 8 \\ / \quad \backslash \\ 5 \quad \square \end{array}$	$\begin{array}{c} 8 \\ / \quad \backslash \\ \square \quad 4 \end{array}$	$\begin{array}{c} 7 \\ / \quad \backslash \\ 6 \quad \square \end{array}$	$\begin{array}{c} 8 \\ / \quad \backslash \\ 7 \quad \square \end{array}$

Naam:

Nr.













vul in.

 $\begin{array}{c} 10 \\ \swarrow \quad \searrow \\ 3 \quad \square \end{array}$	$\begin{array}{c} 10 \\ \swarrow \quad \searrow \\ 1 \quad \square \end{array}$	$\begin{array}{c} 8 \\ \swarrow \quad \searrow \\ \square \quad 5 \end{array}$	$\begin{array}{c} 9 \\ \swarrow \quad \searrow \\ 1 \quad \square \end{array}$
 $\begin{array}{c} 10 \\ \swarrow \quad \searrow \\ 4 \quad \square \end{array}$	$\begin{array}{c} 10 \\ \swarrow \quad \searrow \\ \square \quad 8 \end{array}$	$\begin{array}{c} 9 \\ \swarrow \quad \searrow \\ \square \quad 7 \end{array}$	$\begin{array}{c} 10 \\ \swarrow \quad \searrow \\ 3 \quad \square \end{array}$
 $\begin{array}{c} 10 \\ \swarrow \quad \searrow \\ 1 \quad \square \end{array}$	$\begin{array}{c} 9 \\ \swarrow \quad \searrow \\ 3 \quad \square \end{array}$	$\begin{array}{c} 10 \\ \swarrow \quad \searrow \\ \square \quad 6 \end{array}$	$\begin{array}{c} 10 \\ \swarrow \quad \searrow \\ 7 \quad \square \end{array}$
 $\begin{array}{c} 10 \\ \swarrow \quad \searrow \\ 2 \quad \square \end{array}$	$\begin{array}{c} 10 \\ \swarrow \quad \searrow \\ 9 \quad \square \end{array}$	$\begin{array}{c} 10 \\ \swarrow \quad \searrow \\ 5 \quad \square \end{array}$	$\begin{array}{c} 8 \\ \swarrow \quad \searrow \\ 2 \quad \square \end{array}$
 $\begin{array}{c} 10 \\ \swarrow \quad \searrow \\ 5 \quad \square \end{array}$	$\begin{array}{c} 9 \\ \swarrow \quad \searrow \\ \square \quad 5 \end{array}$	$\begin{array}{c} 10 \\ \swarrow \quad \searrow \\ \square \quad 4 \end{array}$	$\begin{array}{c} 10 \\ \swarrow \quad \searrow \\ 2 \quad \square \end{array}$

Naam:

Nr.

vul in.

 5 2 <input type="text"/>	 7 4 <input type="text"/>	7 <input type="text"/> 1	9 <input type="text"/> 2
 6 1 <input type="text"/>	 9 5 <input type="text"/>	10 <input type="text"/> 3	6 3 <input type="text"/>
 7 2 <input type="text"/>	 6 2 <input type="text"/>	9 3 <input type="text"/>	8 <input type="text"/> 2
 8 <input type="text"/> 7	 10 1 <input type="text"/>	10 4 <input type="text"/>	7 3 <input type="text"/>
 9 1 <input type="text"/>	 8 1 <input type="text"/>	5 <input type="text"/> 3	9 <input type="text"/> 4
 10 2 <input type="text"/>	 5 1 <input type="text"/>	8 3 <input type="text"/>	10 <input type="text"/> 5